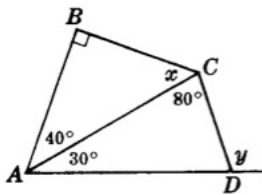


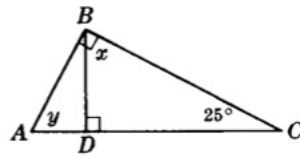
Tarea num. 0

para entregar el 10 ago, 2017

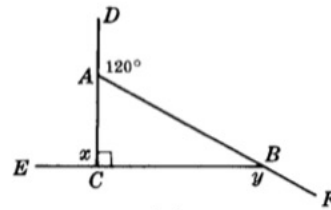
Calcula los ángulos x, y en los siguientes incisos.



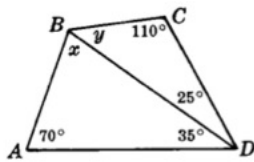
(a)



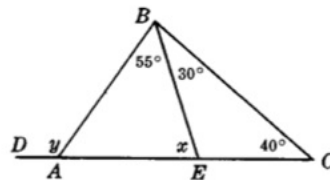
(b)



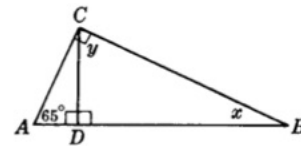
(c)



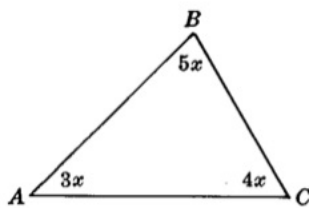
(d)



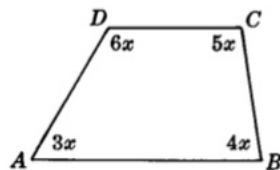
(e)



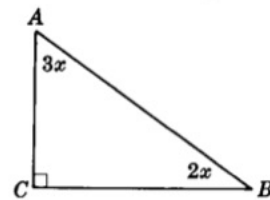
(f)



(g)



(h)



(i)